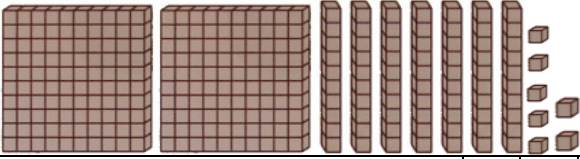
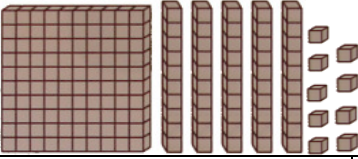




Prénom :

COMPTER	<h1 style="margin: 0;">NUMÉRATION</h1> <h2 style="margin: 0;">Je compte jusqu'à... 999 <small>(03)</small></h2>
----------------	---

• **Dénombrer les quantités suivantes :**

																			
<p>.....</p> <table border="1" style="margin: auto; border-collapse: collapse;"> <tr><td style="width: 30px; text-align: center;">C</td><td style="width: 30px; text-align: center;">D</td><td style="width: 30px; text-align: center;">U</td></tr> <tr><td style="height: 20px;"> </td><td style="height: 20px;"> </td><td style="height: 20px;"> </td></tr> <tr><td style="font-size: 8px;">.....</td><td style="font-size: 8px;">.....</td><td style="font-size: 8px;">.....</td></tr> </table> <p>.....</p>	C	D	U				<p>.....</p> <table border="1" style="margin: auto; border-collapse: collapse;"> <tr><td style="width: 30px; text-align: center;">C</td><td style="width: 30px; text-align: center;">D</td><td style="width: 30px; text-align: center;">U</td></tr> <tr><td style="height: 20px;"> </td><td style="height: 20px;"> </td><td style="height: 20px;"> </td></tr> <tr><td style="font-size: 8px;">.....</td><td style="font-size: 8px;">.....</td><td style="font-size: 8px;">.....</td></tr> </table> <p>.....</p>	C	D	U			
C	D	U																	
.....																	
C	D	U																	
.....																	

																			
<p>.....</p> <table border="1" style="margin: auto; border-collapse: collapse;"> <tr><td style="width: 30px; text-align: center;">C</td><td style="width: 30px; text-align: center;">D</td><td style="width: 30px; text-align: center;">U</td></tr> <tr><td style="height: 20px;"> </td><td style="height: 20px;"> </td><td style="height: 20px;"> </td></tr> <tr><td style="font-size: 8px;">.....</td><td style="font-size: 8px;">.....</td><td style="font-size: 8px;">.....</td></tr> </table> <p>.....</p>	C	D	U				<p>.....</p> <table border="1" style="margin: auto; border-collapse: collapse;"> <tr><td style="width: 30px; text-align: center;">C</td><td style="width: 30px; text-align: center;">D</td><td style="width: 30px; text-align: center;">U</td></tr> <tr><td style="height: 20px;"> </td><td style="height: 20px;"> </td><td style="height: 20px;"> </td></tr> <tr><td style="font-size: 8px;">.....</td><td style="font-size: 8px;">.....</td><td style="font-size: 8px;">.....</td></tr> </table> <p>.....</p>	C	D	U			
C	D	U																	
.....																	
C	D	U																	
.....																	

• **Retrouve les nombres suivant l'exemple :**

- 400 + 50 + 8 = 458**
- 100 + 10 + 1 =
- 300 + 90 + 3 =
- 400 + 70 + 8 =
- 200 + 10 =

- 300 + 50 + 5 =
- 400 + 40 + 3 =
- 300 + 30 + 2 =
- 200 + 10 + 9 =
- 700 + 7 =

• **Décompose les nombres suivant l'exemple :**

- 458 = 400 + 50 + 8**
- 111 =
- 456 =
- 378 =
- 321 =

- 295 =
- 310 =
- 484 =
- 401 =
- 336 =

• **Complète le tableau suivant :**

Nombres donnés		Chiffre des...		
		centaines	dizaines	unités
trois cent vingt-cinq	325	3	2	5
trois cent quatre-vingt-douze				
deux cent trente				
quatre cent quatre				